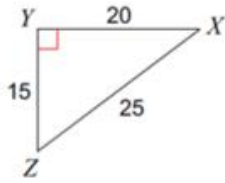
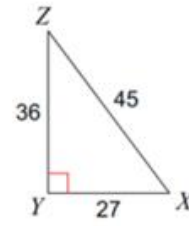


Find the value of the sine, cosine, and tangent of both acute angles in each triangle.

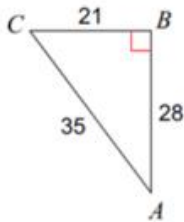
1)



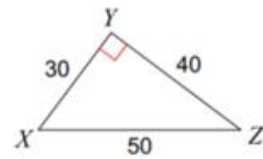
2)



3)



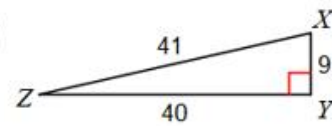
4)



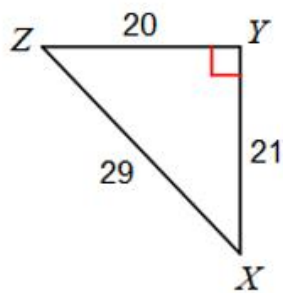
5)



6)



7)



8)

